



CLASS 1
MATHEMATICS
CHAPTER 1

1. TICK THE BIGGER ONE.

a).



b).



c).




d).





e).

2. TICK THE SMALLEST ONE.



3. TICK THE BIGGEST ONE



4. WHO IS NEARER TO THE BUILDING?



5. WHO IS THE FARTHEST FROM THE BUILDING?

