

Class 1
MATHEMATICS
INSIDE OUTSIDE



1. WHICH ONE IS INSIDE OR OUTSIDE



.....



.....

2.



.....



.....

3.



.....



.....

4.



.....

.....

5.



.....

.....


6.



.....

.....

7.



.....

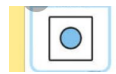

.....

8.



.....

9.



.....

10.



.....